



C2170-051^{Q&As}

IBM i2 Analyst's Notebook V8.9

Pass IBM C2170-051 Exam with 100% Guarantee

Free Download Real Questions & Answers **PDF** and **VCE** file from:

<https://www.pass4itsure.com/c2170-051.html>

100% Passing Guarantee
100% Money Back Assurance

Following Questions and Answers are all new published by IBM Official Exam Center

-  **Instant Download** After Purchase
-  **100% Money Back** Guarantee
-  **365 Days** Free Update
-  **800,000+** Satisfied Customers





QUESTION 1

An intelligence analyst has printed a chart that is cut off at the edges. Which of the following is the BEST way to fix this problem?

- A. Adjust the scale
- B. Remove the border
- C. Center Chart on Paper
- D. Remove header and footer text

Correct Answer: A

QUESTION 2

Which of the following will find all entities within two links of separation in a specific direction, and in chronological order of a targeted entity?

- A. Find Path
- B. Find Linked
- C. Visual Search
- D. Find Matching Entities

Correct Answer: B

QUESTION 3

An intelligence analyst is looking at a histogram of the transaction amounts and a Heat Matrix of the days of the week and wants to know how many transactions between \$10,000 to \$15,000 occurred on a Friday.



Using the image here, what is the correct answer?

- A. 3



- B. 4
- C. 6
- D. 30

Correct Answer: C

QUESTION 4

A researcher in the UK has been tasked with creating a spreadsheet ready to be imported into Analyst's Notebook. The chart required looks like this:



Which of the following spreadsheets is ready for importing, and does not need any spreadsheet formulas or Column Actions to change it in any way?



A.

First Name	Last Name	Number
Sam	Smith	0123456789
Sam	Smith	00000012345678
Frank	Wilson	00000087654321
Sameena	Fatel	0987654321

B.

First Name	Last Name	Telephone Number	Account Number
Sam	Smith	0123456789	00000012345678
Frank	Wilson		00000087654321
Sameena	Fatel	0987654321	

C.

First Name	Sam	Frank	Sameena
Last Name	Smith	Wilson	Patel
Telephone Number	0123456789		0987654321
Account Number	00000012345678	00000087654321	

D.

First Name	Sam	Sam	Frank	Sameena
Last Name	Smith	Smith	Wilson	Patel
Number	0123456789	00000012345678	00000087654321	0987654321

A. Exhibit A

B. Exhibit B

C. Exhibit C

D. Exhibit D

Correct Answer: B

QUESTION 5

An intelligence analyst has been conducting a year long investigation, looking at a money laundering network in a timeline chart.



Value	Count
4:45 PM	7
4:59 PM	6
7:30 AM	3
7:34 AM	3
7:40 AM	3
4:49 PM	3
7:32 AM	2
7:45 AM	2
12:24 AM	1
12:55 AM	1
2:05 AM	1
3:05 AM	1
4:55 AM	1
7:31 AM	1
7:33 AM	1
7:36 AM	1
7:37 AM	1
7:43 AM	1

The analyst wants to know the exact hour and minute when an event occurred. Which filter was selected to display the image here?

- A. Hour of day
- B. Minute of day
- C. Minute of hour
- D. Date and Time

Correct Answer: B

QUESTION 6

When editing a link, users can view certain types of information. Which of the following CANNOT be viewed when editing the Identity Page in the Data folder?

- A. Link Label field
- B. Link Identity field
- C. Number of sibling links
- D. Entity label on each end of the link

Correct Answer: B

QUESTION 7



An intelligence analyst is entering an identity for an entity. After the identity is entered, the Identity field turns red.

What does this indicate?

- A. There is a typographical error in the identity.
- B. The Identity field does not allow for all capital letters.
- C. This identity is already used for another entity on the chart.
- D. There are not enough characters entered in the Identity field.

Correct Answer: C

QUESTION 8

An analyst has created a chart showing certain activities such as meetings. A small part of the chart looks like this: What BEST describes how date and time options are set up for this entity?



- A. Free
- B. Ordered
- C. Sequence

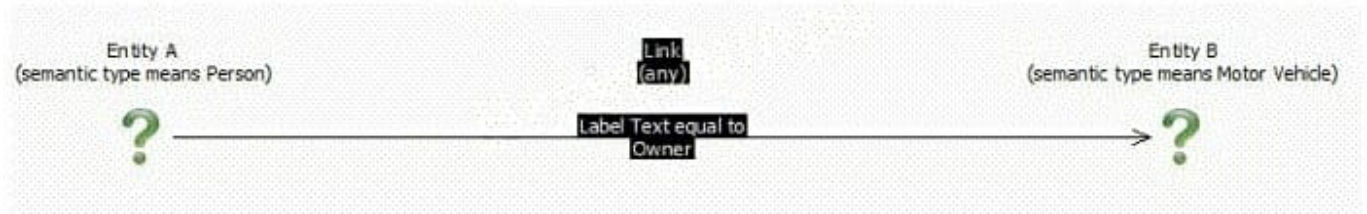


D. Controlling

Correct Answer: A

QUESTION 9

Review the following Visual Search image:



Based on the image above,

which two of the following would NOT be included in the results?

- A. Exhibit A
- B. Exhibit B
- C. Exhibit C
- D. Exhibit D
- E. Exhibit E

Correct Answer: CE

QUESTION 10

An intelligence analyst has a large chart and would like to use List Items to work with that chart. The analyst selects some rows and then clicks the Copy button on the List Items dialog box. What will this accomplish?

- A. The selected chart items will be duplicated on the chart.
- B. The selected rows of data can be pasted into another chart's List Item.
- C. The selected chart items will be copied to clipboard ready for pasting into another chart.
- D. The selected rows of data will be copied to clipboard ready for pasting into another application, such as a spreadsheet.

Correct Answer: D

QUESTION 11

Which of the following features of an entity CANNOT be utilized in a link?



- A. Date
- B. Grades
- C. Identity
- D. Analysis attributes

Correct Answer: C

QUESTION 12

Which of the following are "categories of attributes" available for adding to a chart by a user?

- A. Attribute Entries
- B. Attribute Classes
- C. Attribute Instances
- D. Analysis Attributes

Correct Answer: B

QUESTION 13

Review the following images:



Row	Source	Destination	Call Duration
2	555 555 1234	123 456 7890	3
3	555 555 1234	123 456 7890	11
4	555 555 1234	123 456 7890	5
5	555 555 1234	123 456 7890	2
6	555 555 1234	123 456 7890	7

In order to have the attribute appear as it does on the link above, how would the attribute need to be added during the Assign Columns step in the Import Specification?



A.

Link	Cards	Attributes
Class	Type	Value
Call Duration	Text	[Call Duration]

B.

Link	Cards	Attributes
Class	Type	Value
Call Duration	Number	[Call Duration]

C.

Link	Cards	Attributes
Class	Type	Value
[Call Duration]	Text	[Call Duration]

D.

Link	Cards	Attributes
Class	Type	Value
[Call Duration]	Number	[Call Duration]

A. Exhibit A

B. Exhibit B

C. Exhibit C

D. Exhibit D

Correct Answer: B

QUESTION 14

Which of the following statements about cards is NOT TRUE?



- A. Data within the cards can be displayed on a chart item.
- B. Data within the cards can be used within Visual Search.
- C. Description field of data can be displayed within List Items.
- D. The same cards can be duplicated between entities and links.

Correct Answer: A

QUESTION 15

An intelligence analyst wants to identify the account(s) being paid by account 123456789. How can this be set up in Visual Search?



C A.



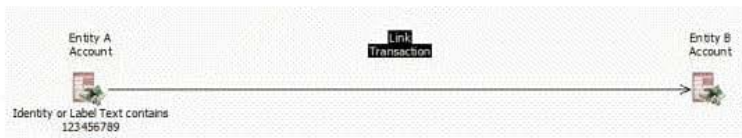
Apply To:

Entity A

Link

Entity B

C B.



Apply To:

Entity A

Link

Entity B

C C.




Apply To:

Entity A

Link

Entity B

C D.



Apply To:

Entity A

Link

Entity B



A. Exhibit A

B. Exhibit B

C. Exhibit C

D. Exhibit D

Correct Answer: B

[C2170-051 Practice Test](#)

[C2170-051 Study Guide](#)

[C2170-051 Braindumps](#)