



ASVAB-SECTION-9^{Q&As}

ASVAB Section Nine : Assembling Objects

Pass ASVAB ASVAB-SECTION-9 Exam with 100% Guarantee

Free Download Real Questions & Answers **PDF** and **VCE** file from:

<https://www.pass4itsure.com/asvab-section-9.html>

100% Passing Guarantee
100% Money Back Assurance

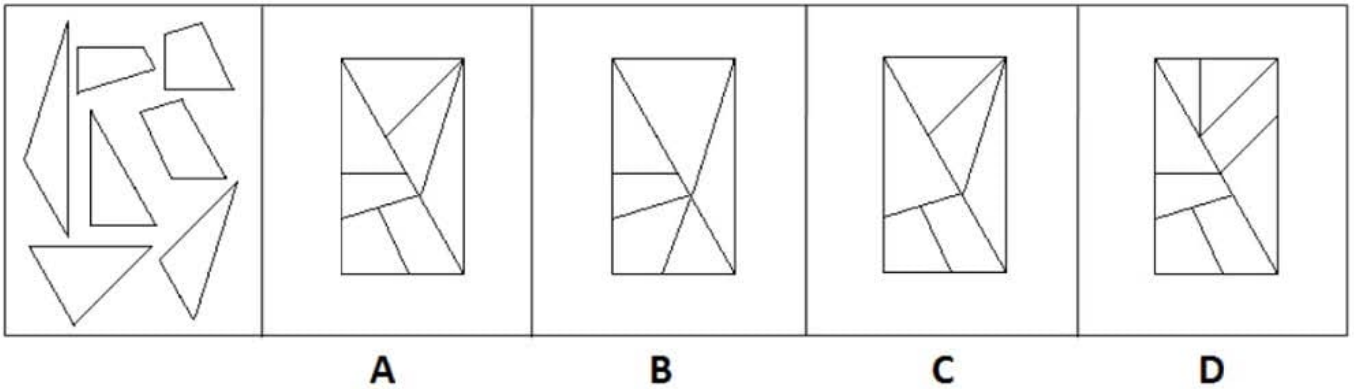
Following Questions and Answers are all new published by ASVAB
Official Exam Center

-  **Instant Download** After Purchase
-  **100% Money Back** Guarantee
-  **365 Days** Free Update
-  **800,000+** Satisfied Customers





QUESTION 1



A. Option A

B. Option B

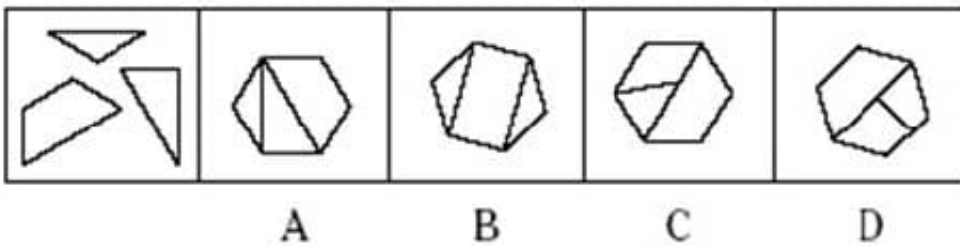
C. Option C

D. Option D

Correct Answer: A

QUESTION 2

Determine which of the choices best solves the problem shown in the first picture. The problem is presented in the first drawing and the remaining four drawings are possible solutions.



A. Option A

B. Option B

C. Option C

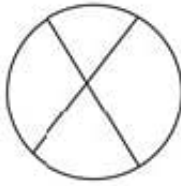
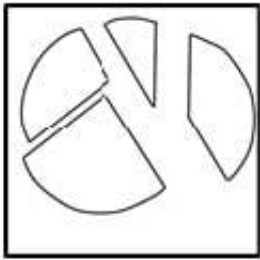
D. Option D

Correct Answer: A

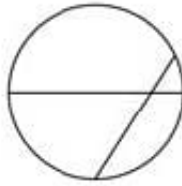
QUESTION 3



Which figure best shows how the objects in the left box will appear if they are fit together?



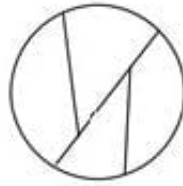
A



B



C



D

A. Option A

B. Option B

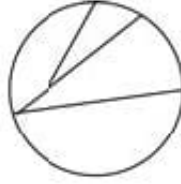
C. Option C

D. Option D

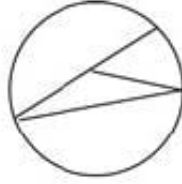
Correct Answer: C

QUESTION 4

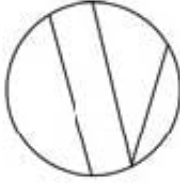
Which figure best shows how the objects in the left box will appear if they are fit together?



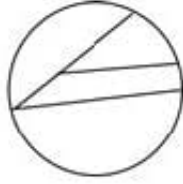
A



B



C



D

A. Option A

B. Option B

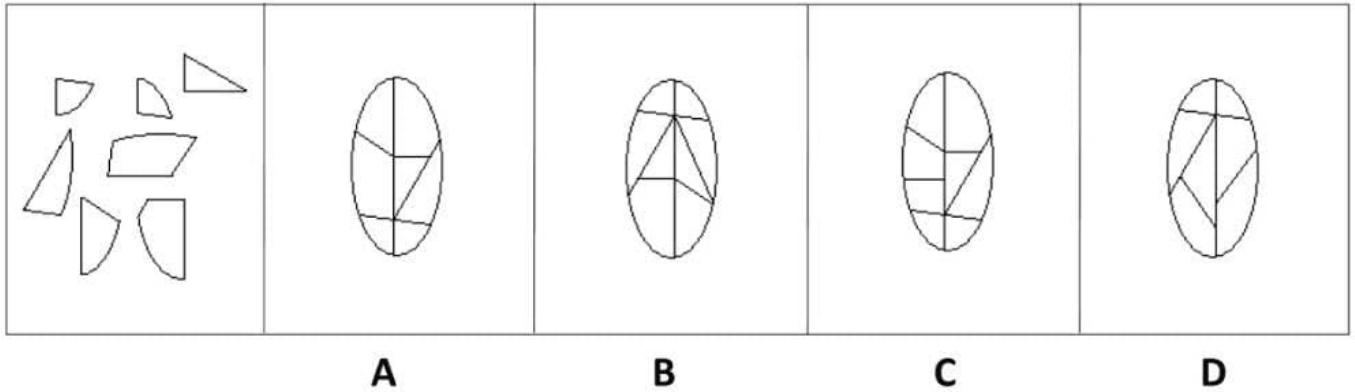
C. Option C

D. Option D

Correct Answer: D

QUESTION 5

Which of these images best solves the problem in the first picture?



A. Option A

B. Option B

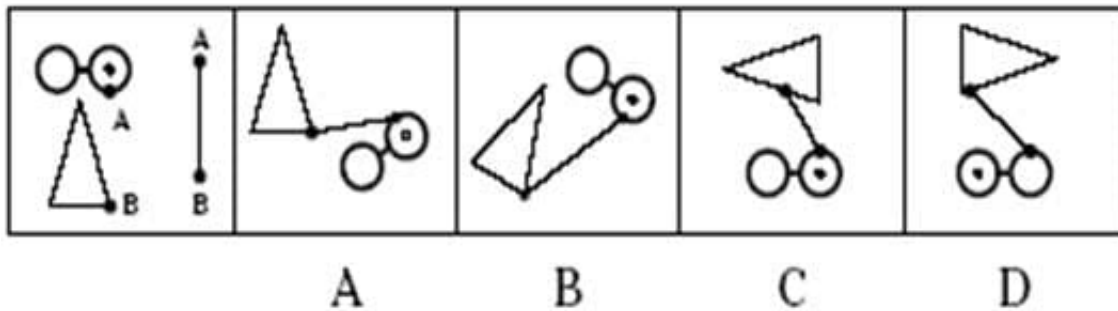
C. Option C

D. Option D

Correct Answer: A

QUESTION 6

Determine which of the choices best solves the problem shown in the first picture. The problem is presented in the first drawing and the remaining four drawings are possible solutions.



A. Option A

B. Option B

C. Option C

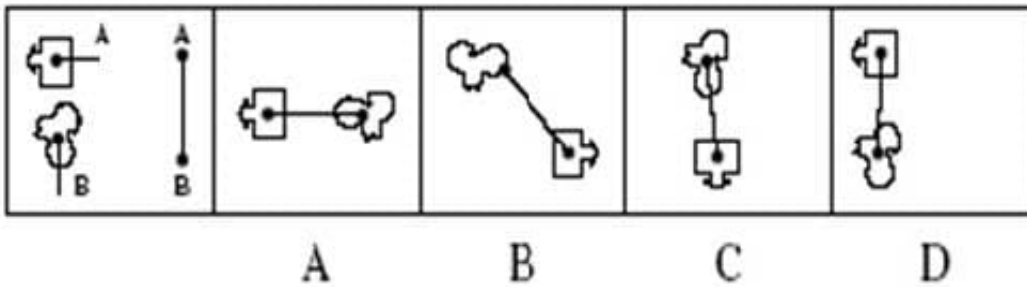
D. Option D

Correct Answer: B

QUESTION 7



Determine which of the choices best solves the problem shown in the first picture. The problem is presented in the first drawing and the remaining four drawings are possible solutions.

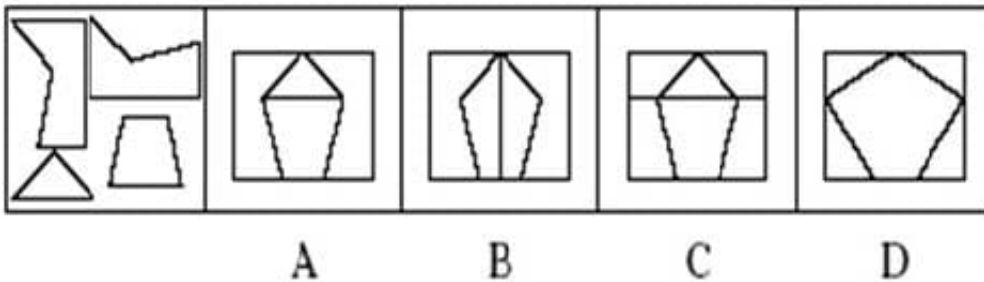


- A. Option A
- B. Option B
- C. Option C
- D. Option D

Correct Answer: C

QUESTION 8

Determine which of the choices best solves the problem shown in the first picture. The problem is presented in the first drawing and the remaining four drawings are possible solutions.



- A. Option A
- B. Option B
- C. Option C
- D. Option D

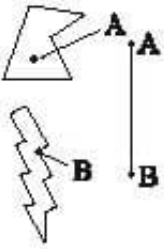
Correct Answer: A

QUESTION 9

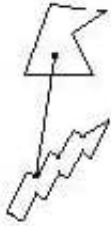
Determine which of the choices best solves the problem shown in the first picture. The problem is presented in the first



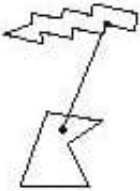
drawing and the remaining four drawings are possible solutions.



(A)



(B)



(C)



(D)



A. Option A

B. Option B

C. Option C

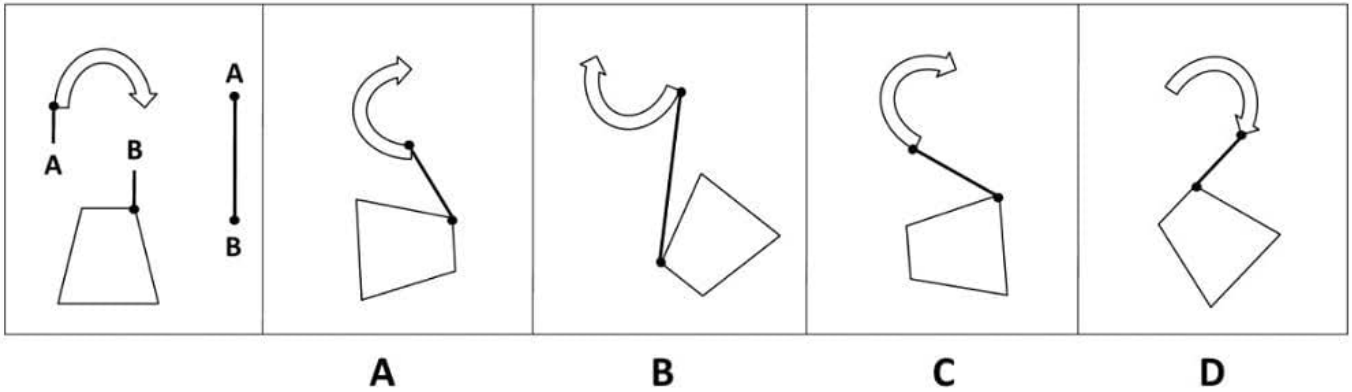
D. Option D

Correct Answer: A

QUESTION 10



Which of these images best solves the problem in the first picture?



A. Option A

B. Option B

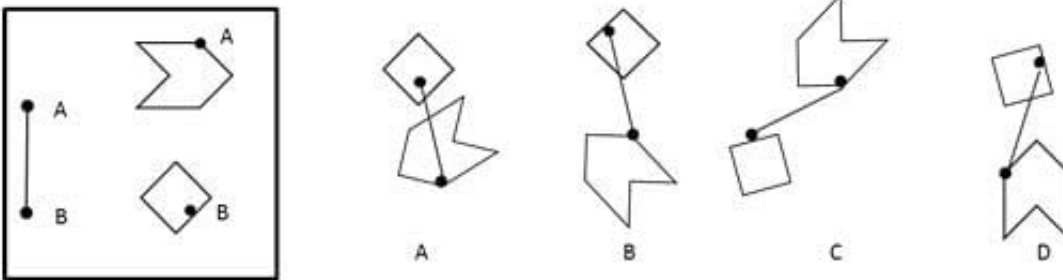
C. Option C

D. Option D

Correct Answer: B

QUESTION 11

Which figure best shows how the objects in the left box will touch if the letters for each object are matched?



A. Option A

B. Option B

C. Option C

D. Option D

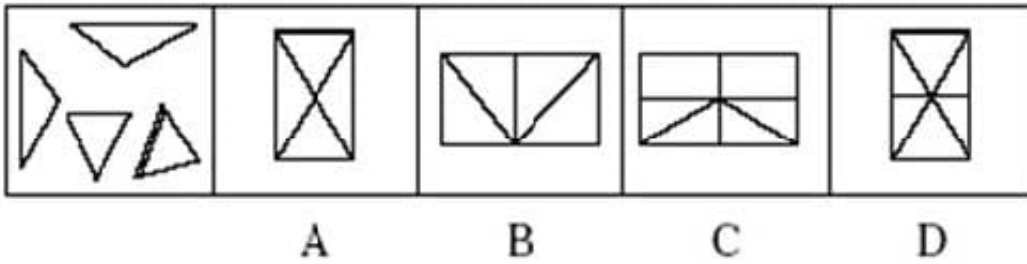
Correct Answer: D

QUESTION 12

Determine which of the choices best solves the problem shown in the first picture. The problem is presented in the first



drawing and the remaining four drawings are possible solutions.



A. Option A

B. Option B

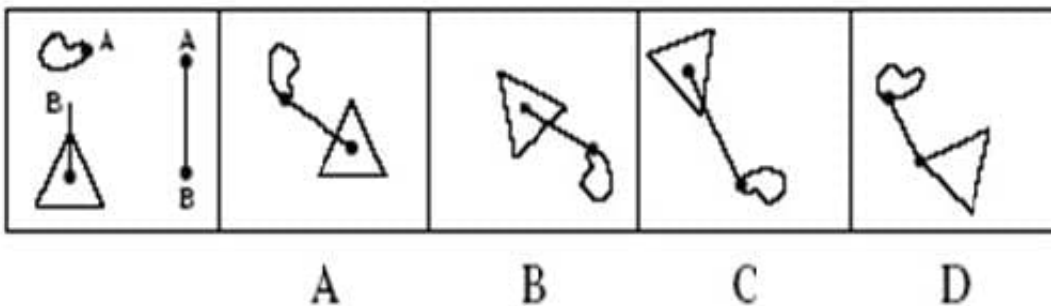
C. Option C

D. Option D

Correct Answer: A

QUESTION 13

Determine which of the choices best solves the problem shown in the first picture. The problem is presented in the first drawing and the remaining four drawings are possible solutions.



A. Option A

B. Option B

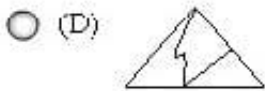
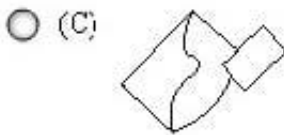
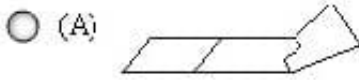
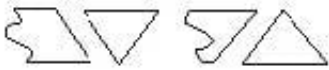
C. Option C

D. Option D

Correct Answer: C

QUESTION 14

Determine which of the choices best solves the problem shown in the first picture. The problem is presented in the first drawing and the remaining four drawings are possible solutions.



A. Option A

B. Option B

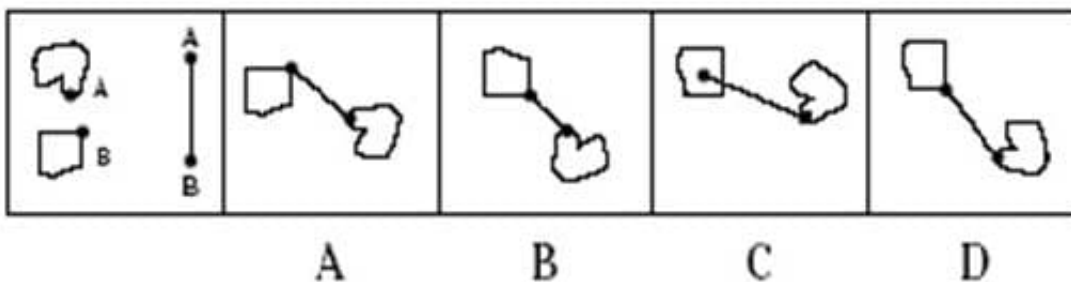
C. Option C

D. Option D

Correct Answer: B

QUESTION 15

Determine which of the choices best solves the problem shown in the first picture. The problem is presented in the first drawing and the remaining four drawings are possible solutions.





A. Option A

B. Option B

C. Option C

D. Option D

Correct Answer: D

[Latest ASVAB-SECTION-9
Dumps](#)

[ASVAB-SECTION-9 PDF
Dumps](#)

[ASVAB-SECTION-9
Braindumps](#)