



OMG-OCUP-100^{Q&As}

OMG-Certified UML Professional Fundamental Exam

**Pass OMG OMG-OCUP-100 Exam with 100%
Guarantee**

Free Download Real Questions & Answers **PDF** and **VCE** file from:

<https://www.pass4itsure.com/omg-ocup-100.html>

100% Passing Guarantee
100% Money Back Assurance

Following Questions and Answers are all new published by OMG
Official Exam Center

-  **Instant Download** After Purchase
-  **100% Money Back** Guarantee
-  **365 Days** Free Update
-  **800,000+** Satisfied Customers





QUESTION 1

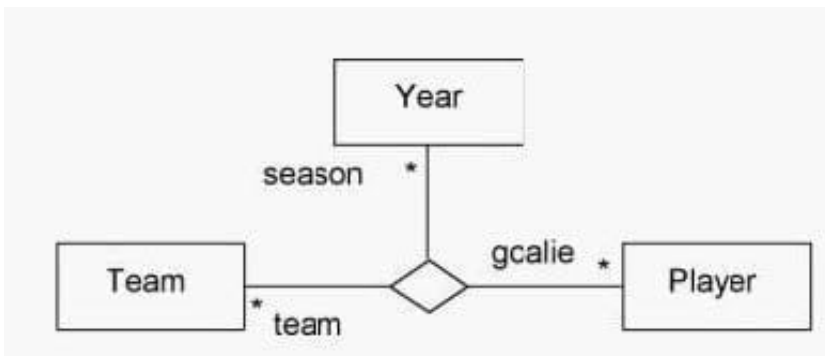
How many arrows can go out of an input parameter node?

- A. none
- B. one
- C. two
- D. any number

Correct Answer: D

QUESTION 2

What does the diamond symbolize in the diagram?

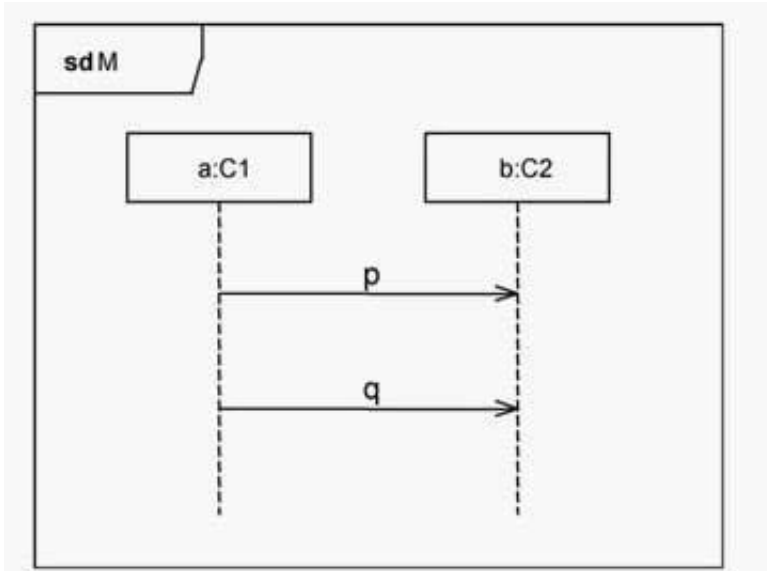


- A. decision point between three classes
- B. three-way message sent to three classes
- C. aggregation of team and goalie objects for a particular season
- D. binary association between instances of Team, Player, and Year
- E. ternary association between instances of Team, Player, and Year

Correct Answer: E

QUESTION 3

Which element in the diagram is the correct label for a lifeline?



- A. b
- B. M
- C. p
- D. C2
- E. a:C1

Correct Answer: E

QUESTION 4

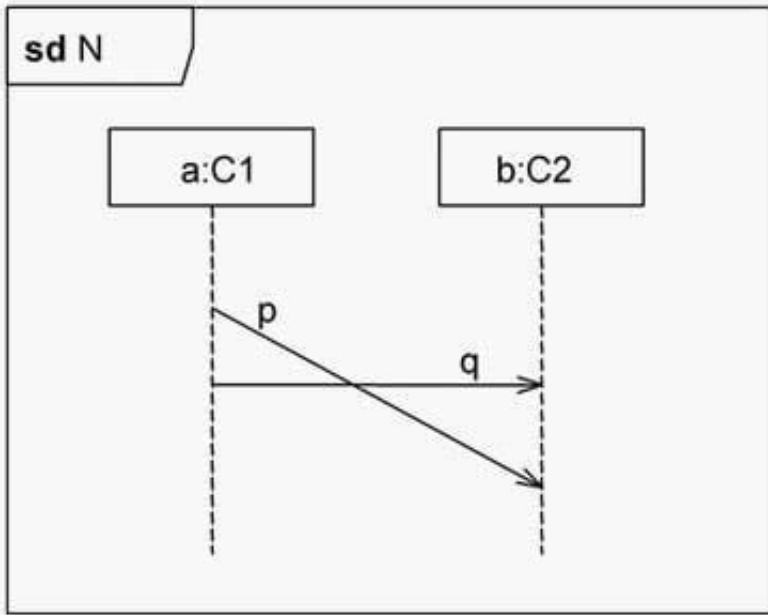
What is true about a data type? (Choose two)

- A. Its instances are data values.
- B. Its instances are mutable objects.
- C. Its instances are identified by GUIDs.
- D. It is a classifier that must not be abstract.
- E. It is the only kind of type that can be returned by an operation.
- F. It can be diagrammed as a rectangle with the keyword dataType

Correct Answer: AF

QUESTION 5

Let us denote sending of p as !p and receiving p as ?p. Which trace defines the interaction N in the exhibit?



- A.
- B.
- C.
- D.

Correct Answer: C

[OMG-OCUP-100 Practice Test](#)

[OMG-OCUP-100 Study Guide](#)

[OMG-OCUP-100 Braindumps](#)