



ASVAB-SECTION-9^{Q&As}

ASVAB Section Nine : Assembling Objects

Pass ASVAB ASVAB-SECTION-9 Exam with 100% Guarantee

Free Download Real Questions & Answers **PDF** and **VCE** file from:

<https://www.pass4itsure.com/asvab-section-9.html>

100% Passing Guarantee
100% Money Back Assurance

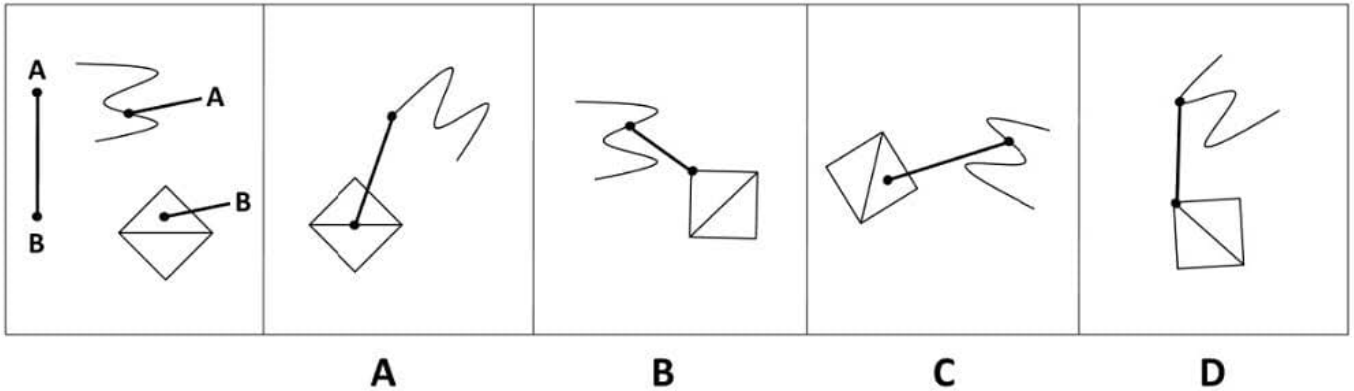
Following Questions and Answers are all new published by ASVAB
Official Exam Center

-  **Instant Download** After Purchase
-  **100% Money Back** Guarantee
-  **365 Days** Free Update
-  **800,000+** Satisfied Customers





QUESTION 1



A. Option A

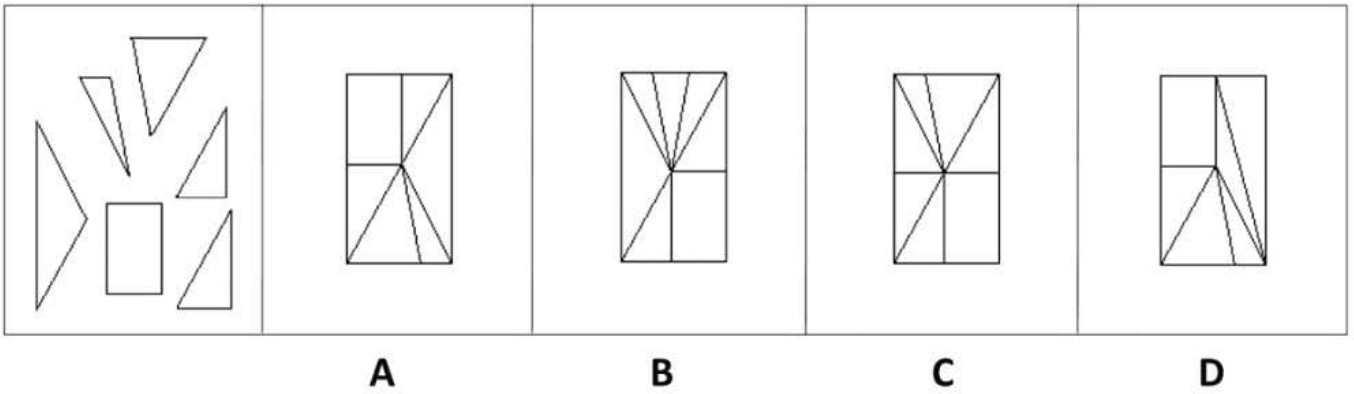
B. Option B

C. Option C

D. Option D

Correct Answer: C

QUESTION 2



A. Option A

B. Option B

C. Option C

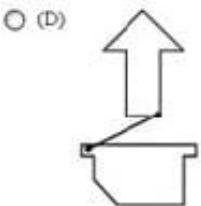
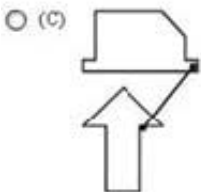
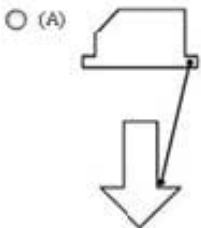
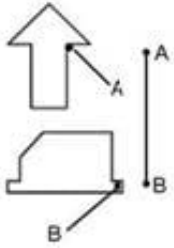
D. Option D

Correct Answer: A



QUESTION 3

Determine which of the choices best solves the problem shown in the first picture. The problem is presented in the first drawing and the remaining four drawings are possible solutions.



A. Option A

B. Option B

C. Option C

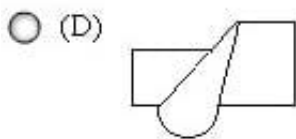
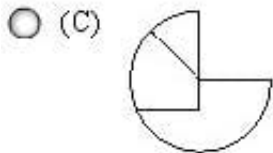
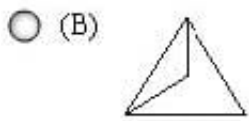
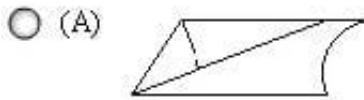
D. Option D

Correct Answer: B



QUESTION 4

Determine which of the choices best solves the problem shown in the first picture. The problem is presented in the first drawing and the remaining four drawings are possible solutions.



A. Option A

B. Option B

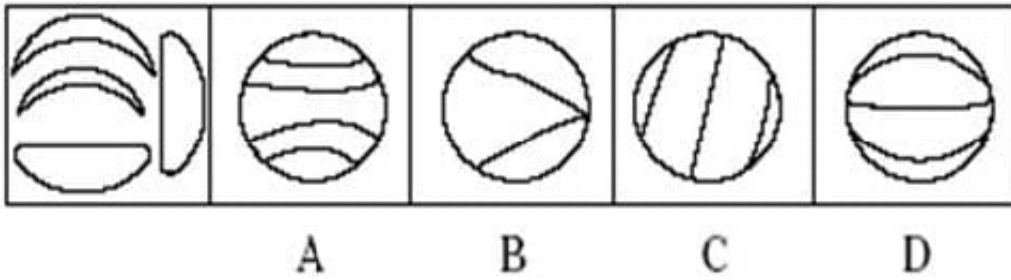
C. Option C

D. Option D

Correct Answer: D

QUESTION 5

Determine which of the choices best solves the problem shown in the first picture. The problem is presented in the first drawing and the remaining four drawings are possible solutions.



A. Option A

B. Option B

C. Option C

D. Option D

Correct Answer: D

[ASVAB-SECTION-9 Practice Test](#)

[ASVAB-SECTION-9 Study Guide](#)

[ASVAB-SECTION-9 Exam Questions](#)